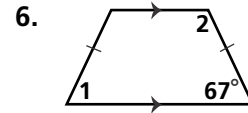
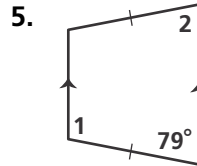
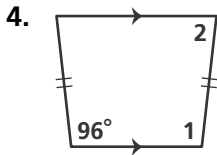
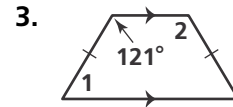
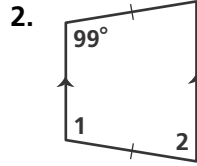
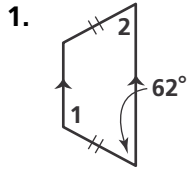


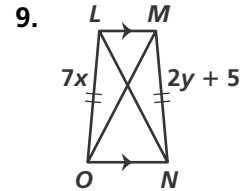
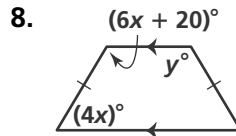
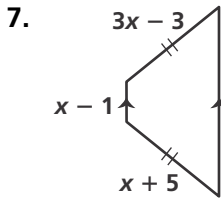
# Practice 6-5

## Trapezoids and Kites

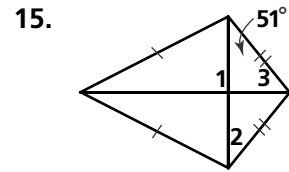
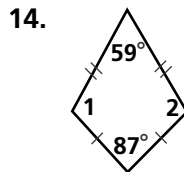
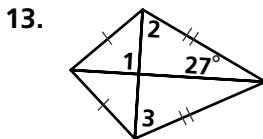
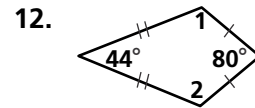
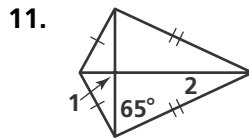
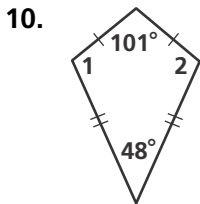
Find the measures of the numbered angles in each isosceles trapezoid.



**Algebra** Find the value(s) of the variable(s) in each isosceles trapezoid.



Find the measures of the numbered angles in each kite.



**Algebra** Find the value(s) of the variable(s) in each kite.

